

DOWNLOAD PDF DOCUMENT



SEGMENT ADDITION POSTUL...

DOWNLOAD DOCUMENT NOW

Updated: 11/02/2017

DISCLAIMER:

CHAUVIN.CO uses the following segment addition postulate book available for free PDF download which is also related with

SEGMENT ADDITION POSTULATE

It is so easy to download segment addition postulate and hundreds of other files from our digital library. Which is more, you don't have to pay for this service. It is completely free! To start with you have to follow the link below, download the program and register on the site. It is fast. No money is needed. Then you get a free access to segment addition postulate and other PDF documents which can also be downloaded to your PC or other devices and used when needed. Don't think that we get some profit from registration. It is because of constant hackers' attacks that do harm to our library and prevent our users from downloading segment addition postulate and other files. Registration helps to make the process of using our eBook library more comfortable. When you pass the registration, you can get segment addition postulate immediately. So, if you or your friend needs segment addition postulate, just make simple steps and get as many books as you need for free

DOWNLOAD NOW

DOWNLOAD PDF DOCUMENT

DOWNLOAD PDF DOCUMENT

SEGMENT ADDITION POSTUL...

[2.3 SEGMENT AND ANGLE ADDITION.NOTEBOOK](#)

2.3SegmentandAngleAddition.notebook September05,2014 2.3SegmentandAngleAddition SegmentAdditionPostulate IfpointMisbetweenpointsPand ICAN... Q,then $PM+MQ=PQ$ Identfyandapplythesegmentaddition postulate. P M Q Identfyandapplytheangleaddition postulate. Jul1110:27AM Jul1110:27AM 20 P 5 M 8 Q P M 16 Q $PQ= PM=$ Jul1110:27AM Jul1110:27AM SolveforthevariableandBCifBis SolveforthevariableandABifBis betwee...

File name: Geo 2.3 Notes.pdf

[Download now or Read Online](#)

[2-THE ANGLE ADDITION POSTULATE.IG](#)

Kuta Software - Infinite Geometry Name The Angle Addition Postulate Date Period 1) Find $m\angle KLM$ if $m\angle KLB = 26$ 2) Find $m\angle FGH$ if $m\angle FGB = 105$ and $m\angle BLM = 60$. and $m\angle BGH = 54$. M F B G K L B H 3) $m\angle GHC = 60$ and $m\angle CHI = 104$. 4) Find $m\angle WVU$ if $m\angle ZVU = 62$ Find $m\angle GHI$. and $m\angle WVZ = 50$. I W Z H C V U G 5) $m\angle FMN = 99$ and $m\angle LMF = 36$. 6) Find $m\angle WDC$ if $m\angle EDC = 145$ Find $m\angle LMN$. and $m\angle EDW = 61$. N E M W F D L C 7) Find ...

File name: Angle_Addition.PDF

[Download now or Read Online](#)

[2-THE ANGLE ADDITION POSTULATE.IG](#)

Kuta Software - Infinite Geometry Name The Angle Addition Postulate Date Period 1 Find $m\angle KLM$ if $m\angle KLB = 26$ 2 Find $m\angle FGH$ if $m\angle FGB = 105$ and $m\angle BLM = 60$ and $m\angle BGH = 54$ M F B G K L B H 3 $m\angle GHC = 60$ and $m\angle CHI = 104$ 4 Find $m\angle WVU$ if $m\angle ZVU = 62$ Find $m\angle GHI$ and $m\angle WVZ = 50$ I W Z H C V U G 5 $m\angle FMN = 99$ and $m\angle LMF = 36$ 6 Find $m\angle WDC$ if $m\angle EDC = 145$ Find $m\angle LMN$ and $m\angle EDW = 61$ N E M W F D L C 7 Find $m\angle JKL$ if $m\angle SKL = 31$ 8 Find $m\angle IHQ$ if $m\angle IHG = 176$ and $m\angle JKS = 52$ and $m\angle Q...$

File name:

[Download now or Read Online](#)

[G_AIOSW07_GPS_CH01_246-266.QXD](#)

Name Class Date 1-5 Guided Problem Solving GPS Student Page 34 Exercise 34 Algebra Use the diagram at the right A Bif AD 12 and AC 4y - 36 nd the value of y Then nd AC and DC DE C Read and Understand 1 The segments AD and DC are marked alike What does that indicate All rights reserved 2 Based on your answer to Step 1 how are the lengths of AD and DC related 3 What postulate can we use to solve for y Plan an...

File name:







[Download now or Read Online](#)

DOWNLOAD PDF DOCUMENT

DOWNLOAD PDF DOCUMENT

Here below another book similar with:

SEGMENT ADDITION POSTUL...

-  [segment addition postulate](#)
-  [tens ones place value mat addition](#)
-  [two digit addition regrouping homework word problems](#)
-  [coloring double digit addition](#)
-  [60 addition worksheets with five 4 digit addends by kapoo stem](#)
-  [addition made easy](#)

DOWNLOAD PDF DOCUMENT